
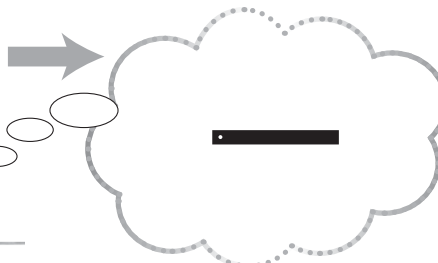


## Activity 7.04




Let's visualise the bead movements and draw the final bead positions.


1 Move up 13, move down 3



2 Move up 16, move down 5



3 Move up 17, move down 12



Can you visualise and calculate these mentally?

1  $18 - 5 =$

4  $18 - 3 =$

2  $17 - 15 =$

5  $13 - 1 =$

3  $18 - 10 =$

6  $16 - 16 =$