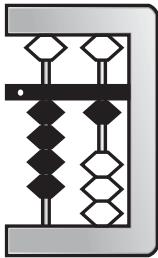


Activity 8.02

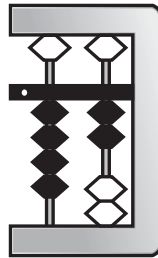


Let's count on! Write the missing numbers and draw the missing beads.

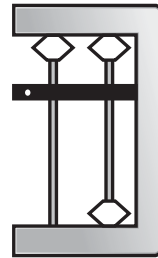
41,



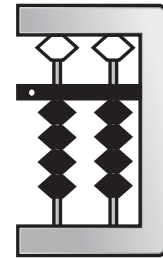
42,



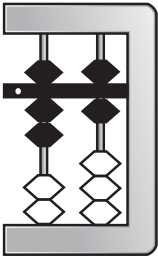
,



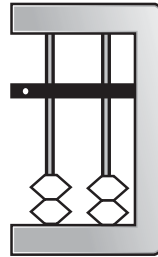
44




76,




,



78,



79



Can you identify the missing numbers here?
Write them down.

- 1 21, _____, 23, _____, _____, 26, _____, 28.
- 2 64, _____, 66, _____, _____, _____, 70, _____.
- 3 88, _____, 90, _____, 92, _____, _____, 95.
- 4 52, _____, 54, _____, 56, 57, _____, _____.
- 5 _____, 33, _____, 35, _____, _____, 38, _____.